



History

Unit 2:

Ancient Egypt

Name: _____

Date: _____

Do Now!


Dear 6th Grade Cartographer,

- 1) Take out a pen or pencil.
- 2) **Silently** put your binder on the floor.
- 3) Define geography in one complete sentence. _____

- 4) Why would it be an advantage to live in a land that produces a surplus of food? _____

- 5) List one modern country that is located in Mesopotamia? _____

- 6) When you have finished writing, read your D.E.A.R. book silently.



History

Unit 2:

Ancient Egypt

Name: _____

Date: _____

Label the following countries on the map of Asia on the following page. Use a pencil. Use a ruler and straight edge if necessary. Use FOUR colored pencils to shade in each country. No country may border a country of the same color.

Lebanon

Jordan

Syria

Israel

Iraq

Iran

Saudi Arabia

Kuwait

Bahrain

Qatar

Yemen

Oman

Palestinian Authority

Turkey

United Arab Emirates

Egypt

Sudan

Pakistan

India

Afghanistan

China



History

Unit 2:

Ancient Egypt

Name: _____

Date: _____

Countries of Africa

Egypt

Tunisia

Algeria

Morocco

Somalia

Uganda

Kenya

Sudan

Libya

Ethiopia

Eritrea

Djibouti

Chad.

Western Sahara

Ghana

Gambia

Guinea

Liberia

Cote D'Ivoire

Mauritania

Senegal

Guinea-Bissau

Sierra Leone

Mali

Burkina Faso

Cape Verde

Togo

Benin

Nigeria

Niger

Cameroon

Gabon

Angola

Namibia

Equatorial Guinea

Republic of the Congo

Democratic Republic of the
Congo

South Africa

Botswana

Lesotho

Swaziland

Mozambique

Zimbabwe

Malawi

Zambia

Tanzania

Burundi

Rwanda

Central African Republic

Madagascar

Seychelles

Sao Tome and Principe

Comoros



History

Unit 3:

Mesopotamia

Name: _____

Date: _____

MAP I Directions: Write the names of the countries in the numbered blank spaces.



1. _____

2. _____

3. _____

4. _____

5. _____

6. _____

7. _____

8. _____

9. _____

10. _____



History

Unit 3:

Mesopotamia

Name: _____

Date: _____

MAP II Directions: Write the names of the countries in the numbered blank spaces.



1. _____

2. _____

3. _____

4. _____

5. _____

6. _____

7. _____

8. _____

9. _____

10. _____



History

Unit 3:

Mesopotamia

Name: _____

Date: _____

MAP III Directions: Write the names of the countries in the numbered blank spaces.



1. _____

2. _____

3. _____

4. _____

5. _____

6. _____

7. _____

8. _____

9. _____

10. _____



History

Unit 3:

Mesopotamia

Name: _____

Date: _____

MAP IV Directions: Write the names of the countries in the numbered blank spaces.



1. _____

2. _____

3. _____

4. _____

5. _____

6. _____

7. _____

8. _____

9. _____

10. _____



Name: _____

Date: _____

MAP V Directions: Write the names of the countries in the numbered blank spaces.



1. _____

2. _____

3. _____

4. _____

5. _____

6. _____

7. _____

8. _____

9. _____

10. _____



History

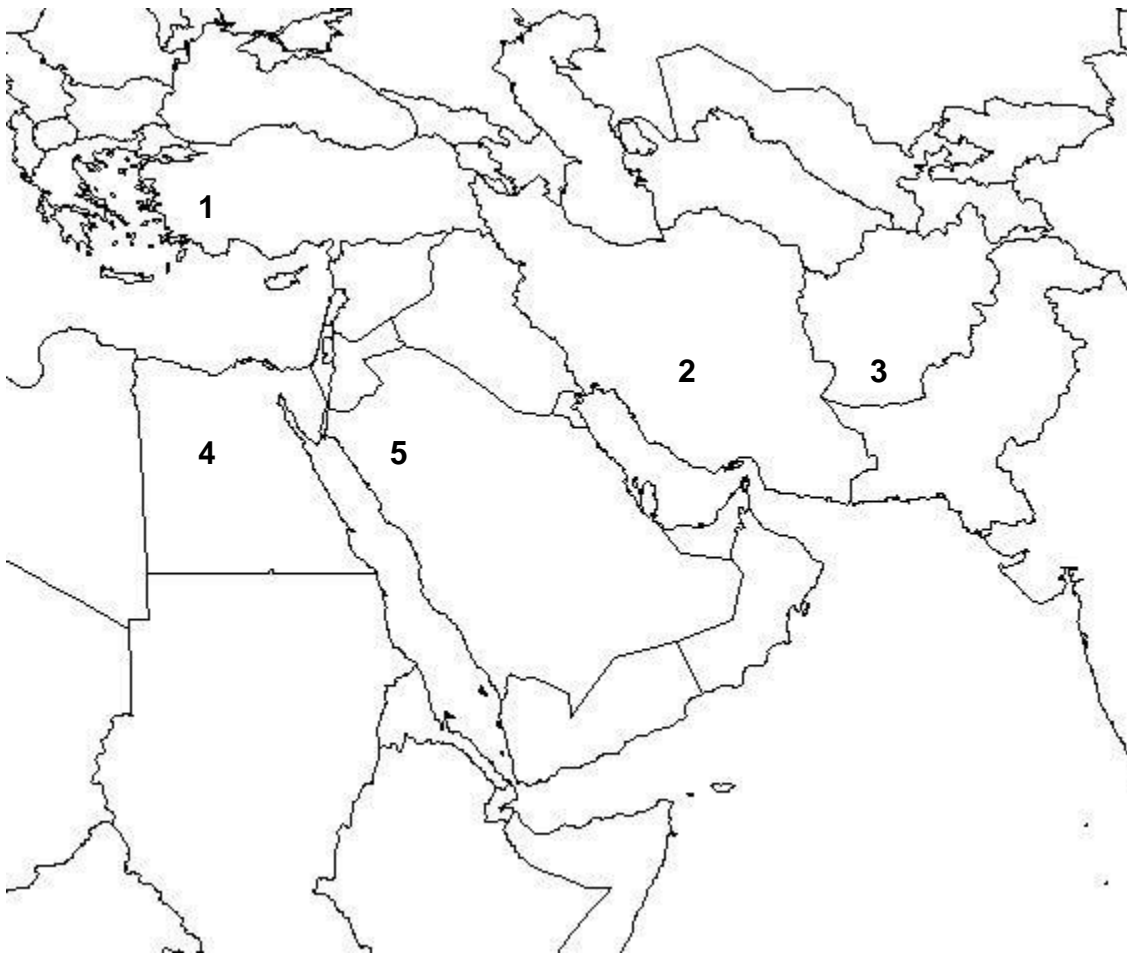
Unit 3:

Mesopotamia

Name: _____

Date: _____

Asia Map I Directions: Write the names of the countries in the numbered blank spaces.



1. _____

2. _____

3. _____

4. _____

5. _____



History

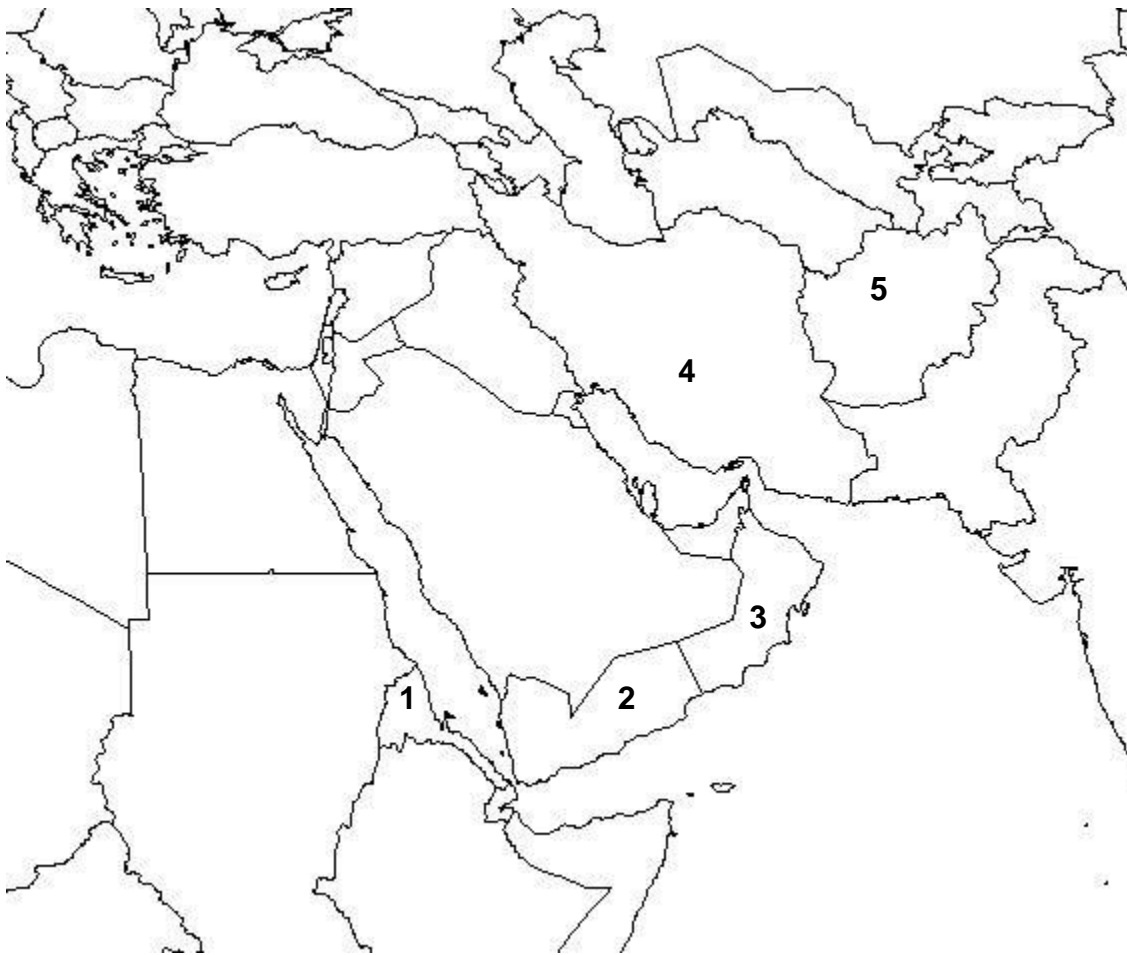
Unit 3:

Mesopotamia

Name: _____

Date: _____

Asia Map II Directions: Write the names of the countries in the numbered blank spaces.



1. _____

2. _____

3. _____

4. _____

5. _____



History

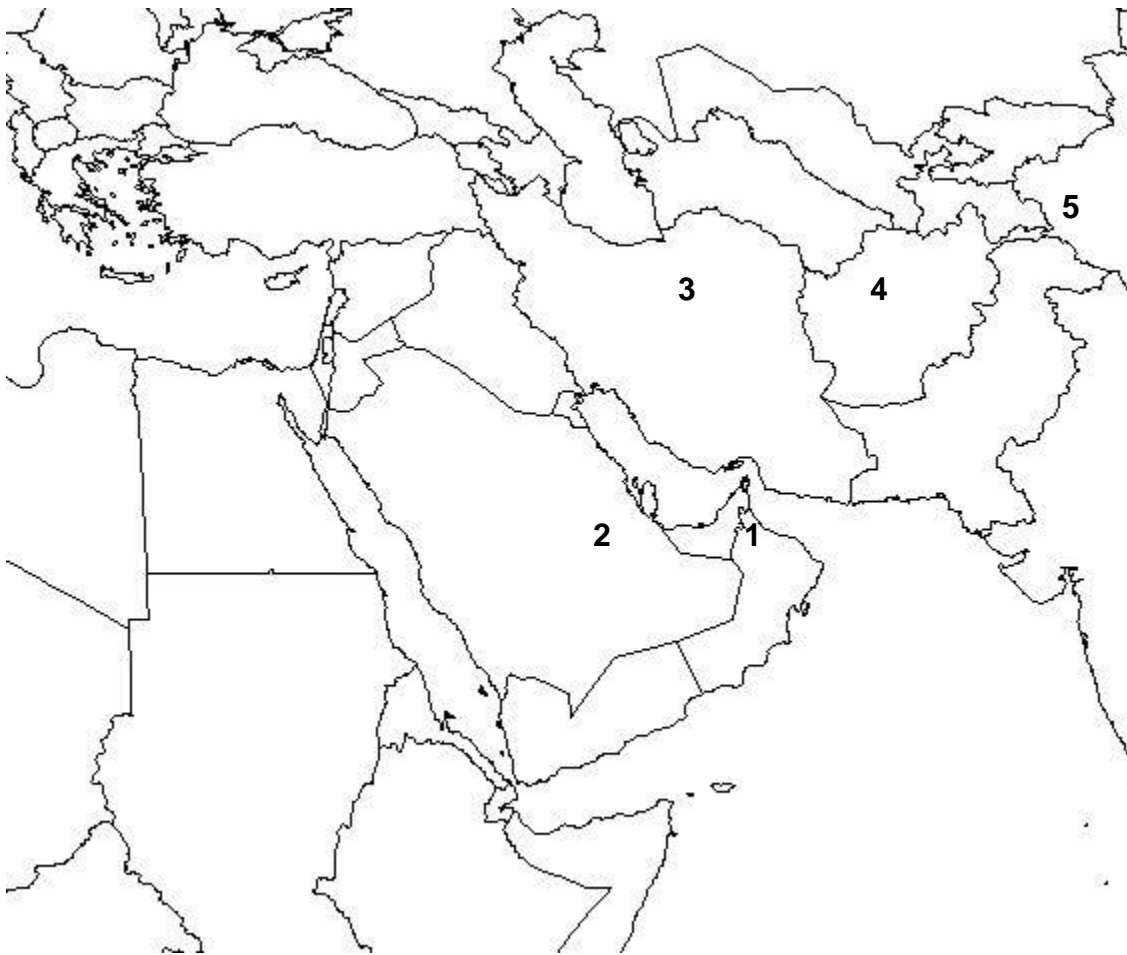
Unit 3:

Mesopotamia

Name: _____

Date: _____

Asia Map III Directions: Write the names of the countries in the numbered blank spaces.



1. _____

2. _____

3. _____

4. _____

5. _____



History

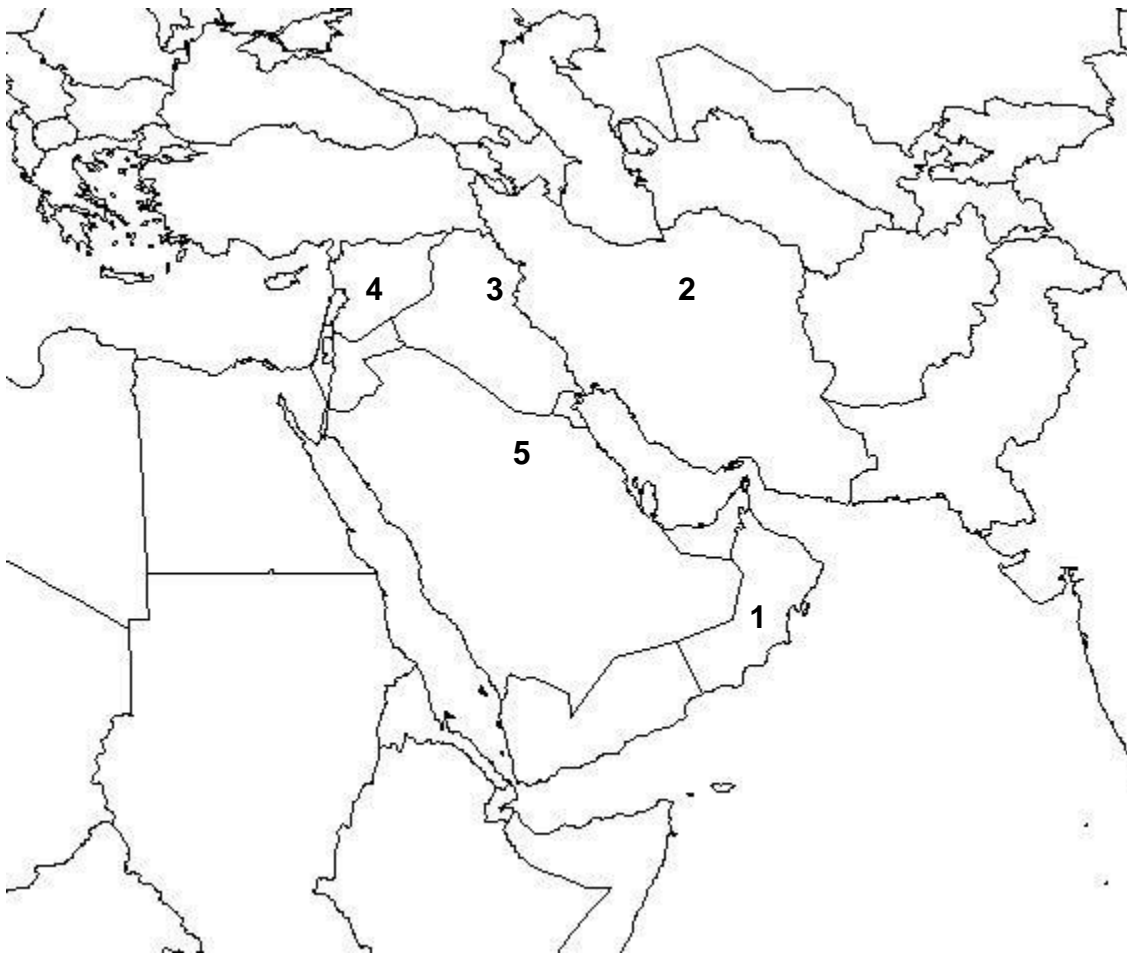
Unit 3:

Mesopotamia

Name: _____

Date: _____

Asia Map IV Directions: Write the names of the countries in the numbered blank spaces.



1. _____

2. _____

3. _____

4. _____

5. _____



History

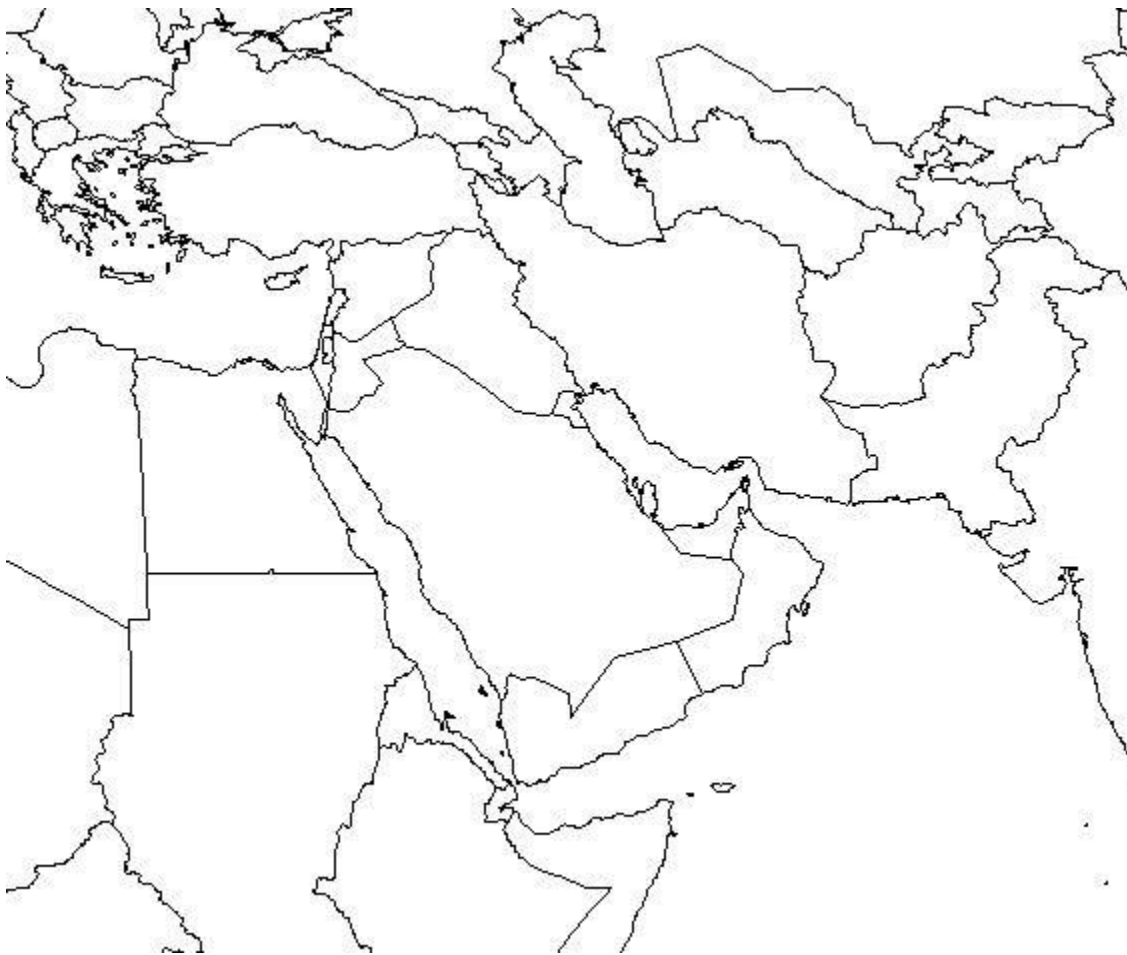
Unit 3:

Mesopotamia

Name: _____

Date: _____

Asia Map V Directions: Write the names of the countries in the numbered blank spaces.



1. _____

2. _____

3. _____

4. _____

5. _____