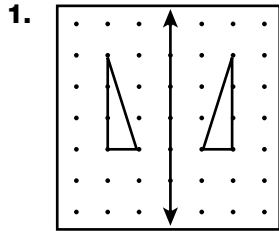
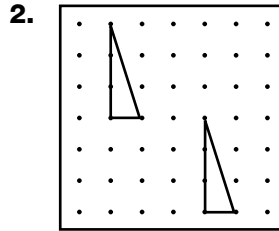


# Transformations

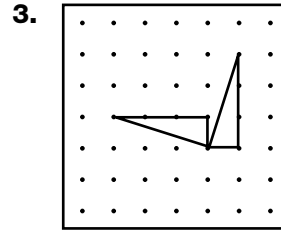
Write whether each pair of figures shows a translation, a reflection, or a rotation.



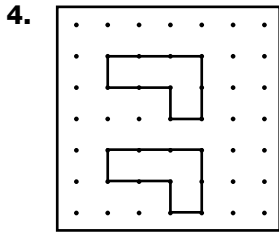
\_\_\_\_\_



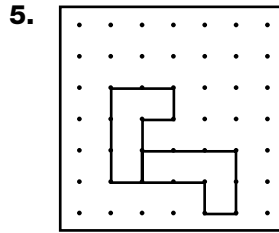
\_\_\_\_\_



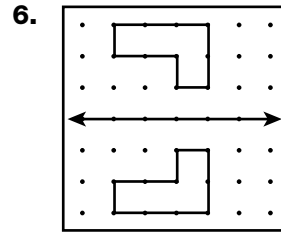
\_\_\_\_\_



\_\_\_\_\_

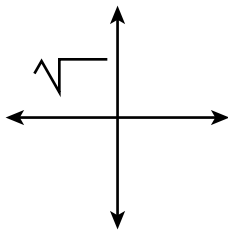


\_\_\_\_\_

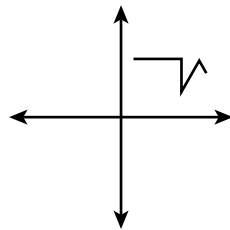


\_\_\_\_\_

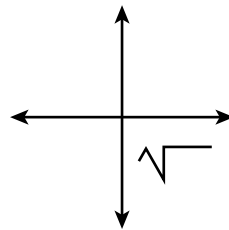
7. Which image represents the first figure reflected across a vertical line? \_\_\_\_\_



**A**



**B**



**C**

