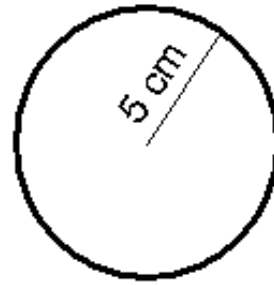


Use the radii or the perimeter to calculate the *area* for each of the circles below. Use 3.14 as the value of Pi.



area = _____ cm^2



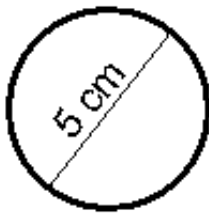
area = _____ cm^2



area = _____ cm^2



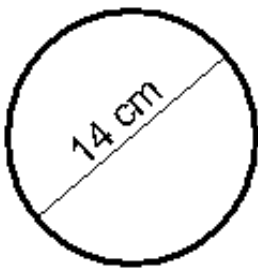
area = _____ cm^2



area = _____ cm^2



area = _____ cm^2



area = _____ cm^2



area = _____ cm^2

