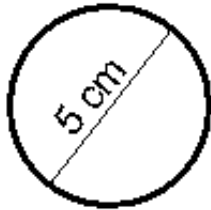


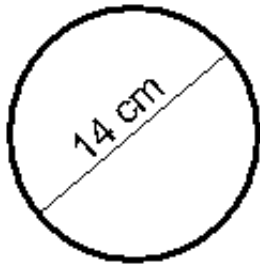
Use the diameters or the radii to calculate the *circumference* for each of the circles below. Use 3.14 as the value of Pi.



circumference = _____ cm



circumference = _____ cm



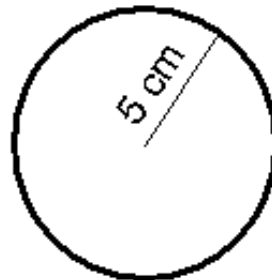
circumference = _____ cm



circumference = _____ cm



circumference = _____ cm



circumference = _____ cm



circumference = _____ cm



circumference = _____ cm



This work is licensed under a

[Creative Commons Attribution-ShareAlike 2.5 Canada License](https://creativecommons.org/licenses/by-sa/4.0/ca/)